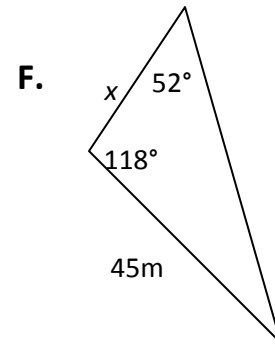
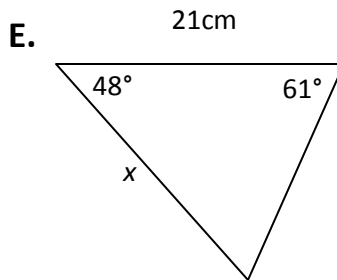
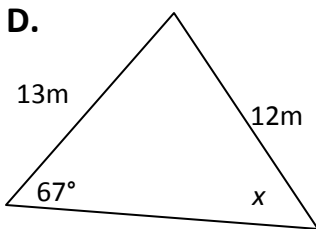
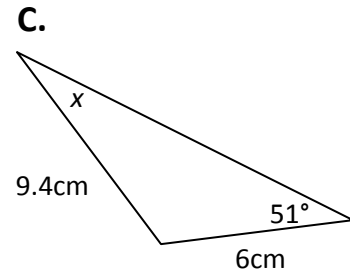
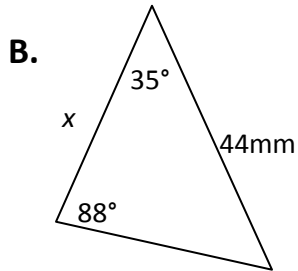
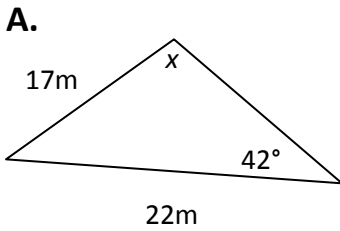
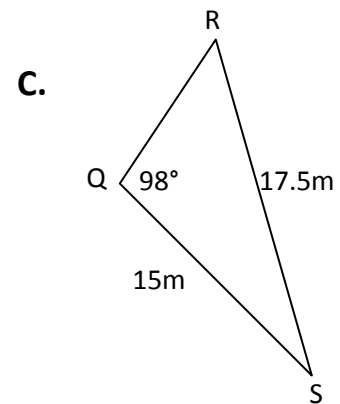
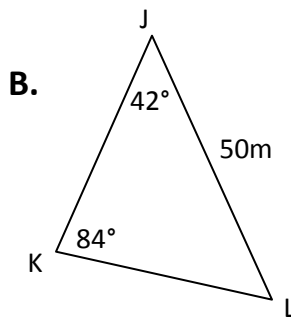
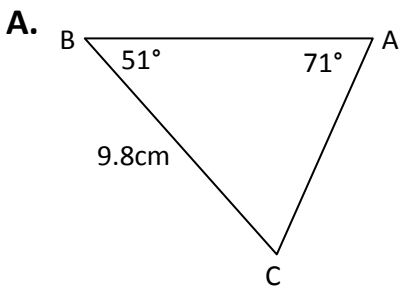


Sine Law Worksheet

1. Solve for the unknown in each triangle. Round to the nearest hundredth.



2. Solve for **all** missing sides and angles in each triangle. Round to the nearest hundredth.



D. $\triangle XYZ : y = 29mm, \angle X = 22^\circ, \angle Z = 39^\circ$

E. $\triangle GHI : g = 13cm, i = 8cm, \angle G = 115^\circ$

F. $\triangle MNO : n = 31m, o = 28m, \angle N = 62^\circ$