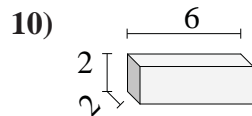
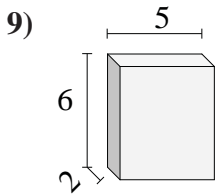
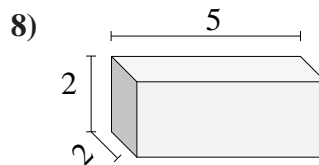
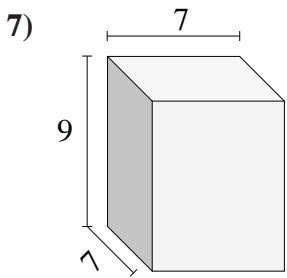
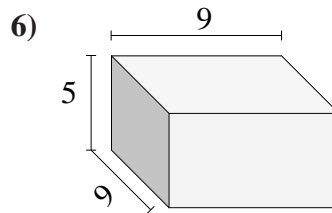
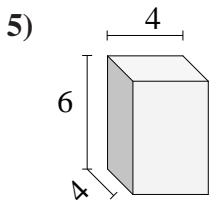
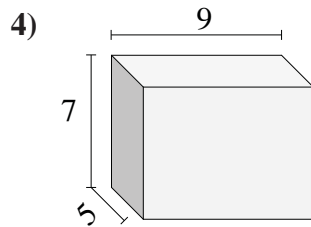
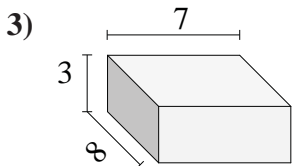
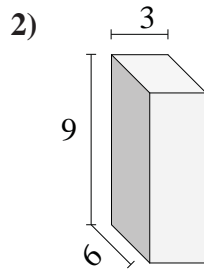
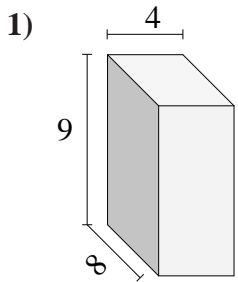




Find the volume of each of the rectangular prisms.

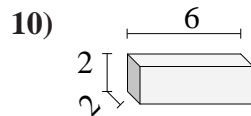
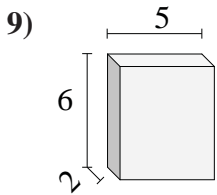
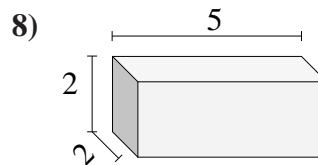
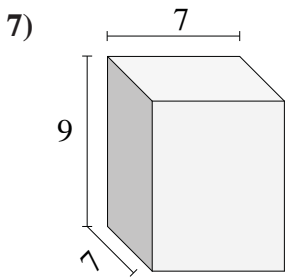
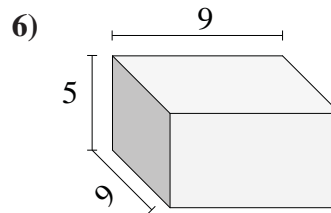
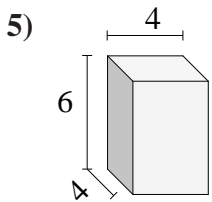
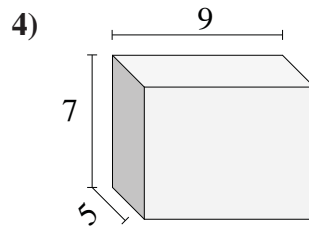
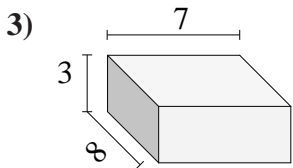
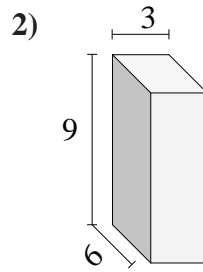
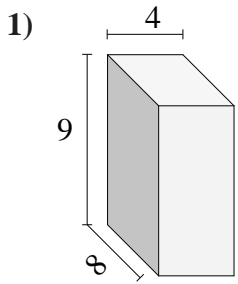


Answers

- 1. \_\_\_\_\_
- 2. \_\_\_\_\_
- 3. \_\_\_\_\_
- 4. \_\_\_\_\_
- 5. \_\_\_\_\_
- 6. \_\_\_\_\_
- 7. \_\_\_\_\_
- 8. \_\_\_\_\_
- 9. \_\_\_\_\_
- 10. \_\_\_\_\_



Find the volume of each of the rectangular prisms.



Answers

- 1. 288
- 2. 162
- 3. 168
- 4. 315
- 5. 96
- 6. 405
- 7. 441
- 8. 20
- 9. 60
- 10. 24